

Hi everyone! You are all doing super work for school. Well done!

Thank you for all the work you have sent me.  
I have put work up on the 1<sup>st</sup> and 2<sup>nd</sup> class section of the school website.  
(On some android phones the drop down menu is not opening on the school website.  
You will be able to see it from a laptop if this happens.)

This is your work for Monday, Tuesday and Wednesday.  
Thursday and Friday sees the start of work being uploaded to Aladdin Connect.

Remember you can contact me with your work on the e-mail below.  
Maybe you are working on other projects that you would like to show me.

My e -mail is [anna@ballyadamsns.com](mailto:anna@ballyadamsns.com)


To see all attachments that I refer to you have to go out of this document, scroll down and you will see all the attachments listed underneath this document. Click on the one you want.

### Handwriting Competition.

This week I am inviting you to take part in a handwriting competition.  
All the details are in the attachment called 'Handwriting Competition'.  
I hope lots of you will enter.  
Looking forward to seeing your work.

### **English Reading.**

Remember READING is the greatest homework of all.  
Read a little or a lot every day.



"Everyone is a reader.....some just haven't found the right book yet."

### 10 ways to become a better reader.

1. **Read.** 2. *Read.* 3. **Read.** 4. *Read.* 5. **READ.** 6. **Read.** 7. **READ.** 8. *Read.* 9. **Read.** 10. **Read!!!!**



## English Writing.

### Continue Your Diary.

- Every day write four or five sentences about what you did that day.
- Download a template for your diary using the attachment or use your own notebook.



## Maths.

- **Pattern. Counting in.....**

Click on the attachment. There are three worksheets, one for each day for you. Counting in 2s and 4s. Counting in 5s and 10s. Counting in 3s and 6s. Practise counting out loud also.

### Games for Pattern Counting.

- **Listen and Count. 2 player game.**

You will need: A tin and blocks/pieces of Lego. Drop Lego into the tin one a time and the other person counts in twos as they drop in.

For example:

Player 1 drops 6 pieces of Lego into a tin.

Player 2 listens and counts.

Player 1 asks player 2 what the answer is. The answer in this one is 12.

Variation: This game can be played in the exact same way changing the number you are counting in. Count in 3s, 4, 5s, 6s and 10s.

- **Number Tennis.**

Take turns counting in 2s, 3s, 4s, 5s, 6s and 10s.

Starts by saying zero, then 2, 4, 6, 8 over and back.

Variation: Start at 20 . Start at 50.

Variation 2: Start at 50 and go backwards in 2s or 10s etc.

- Continue with Master your Maths, week 20. Page 44 and 45. Friday test on page 85.
- If this is your first time accessing Master Your Maths here is how. Go to [www.cjfallon.ie](http://www.cjfallon.ie) There is a yellow box, click here. Then click on your class and then Maths. Open the Master Your Maths 2.




#### All Resources

Level	Class	Subject	Series	Title	Resource
<input checked="" type="checkbox"/> Primary	<input checked="" type="checkbox"/> 2nd Class	<input checked="" type="checkbox"/> Maths	<input checked="" type="checkbox"/> Master Your Maths	<input checked="" type="checkbox"/> Master Your Maths 2	<input checked="" type="checkbox"/> Online Book

- Enter your name, e-mail and you have access. Remember for the next time.
- There are 12 daily questions. Type in page 44 in the top right corner and do week 20. Say the answers out



loud or record.

**Monday**

- How many sides has a rectangle?
- $\frac{1}{2}$  of 6 =
- Draw a line of symmetry. 
- $\begin{array}{r} t\ u \\ 8\ 6 \\ -2\ 4 \\ \hline \end{array}$
- $8 + 9 + \square = 22$
- The 6th month of the year is
- $11 + 14 + 23 = \square$
- Draw the least number of coins needed to make 77c.   
 
- 7, 14, 21, 28,
- Colour the cone.   
 
- Jason had 20c. He spent half his money on stickers. How much had he left?
- There were 23 people on a bus. At the bus stop, 21 people got off and 18 got on. How many were on the bus then?

/12

**Tuesday**




- $50 + \square = 58$
- $6 + 4 + 3 \rightarrow 3 + 4 + \square$
- Circle the digit in the units place: 175.
- Colour the shape that can roll.   
 
- $9 + \square + 6 = 22$
- $25 + 30 = \square$
- Mary had:  How many more cent did she need to have €1?
- $9 + 9 + 1 = \square$
- What is the value of the underlined digit: 119?
- How many months in summer and autumn altogether?

The farmer collected 35 eggs from his hens one morning.

- He sold 12 and broke 7. How many eggs did he have left?
- If he collected 21 eggs the next day, how many eggs did the farmer have then?




/12


**Wednesday**

- How many sides has a triangle?
- $\frac{1}{2}$  of 8 =
- Draw a line of symmetry.   
 
- $\begin{array}{r} t\ u \\ 4\ 5 \\ -1\ 4 \\ \hline \end{array}$
- What time is it?   
 
- July is in the season of
- $13 + 25 + 21 = \square$
- Draw the least number of coins needed to make 85c.   
 
- 10, 20, 30, 40,
- How many faces has a cone?
- Mark wrote down the number 45. Jill wrote down a number 28 greater than that. What number did Jill write down?
- Sarah spent half of her 22c buying a pencil. How much was the pencil?

/12

**Thursday**

- $41 + \square = 50$
- $9 + 1 + 6 \rightarrow 6 + 1 + \square$
- Circle the digit in the tens place: 766.
- Colour the oval.   
 
- $8 + \square + 3 = 15$    
 
- Pete has:  How much more does he need to have 65c?
- $10 + 8 + 2 \rightarrow 10 + \square$
- What is the value of the underlined digit: 147?
- How many minutes in 1 hour?

There are 8 cows and 2 sheep in a field.   
 

- How many legs have the cows and sheep altogether?
- How many eyes have the cows and sheep altogether?

/12

## Gaeilge

- If you have not used Abair Liom online before follow the instructions on the attachment to get set up.
- Click on the attachment for lots of activities for Gaeilge for this week. It is based around the topic of a Picnic.



## History.

## The First Moon Landing.

- Download the attachment 'The First Moon Landing' and read all about it. You may need help reading some of the words.
- Click into YouTube and watch these two short videos to find out more information and to listen to a story about The Man on the Moon.
- Complete the worksheet What I would Take to Space. See attachment.



THINGS YOU WANNA KNOW | NAT GEO KIDS S1 - E3  
Apollo 11 - The First Moon Walk | Things You Wanna Know



#kidbooksondeloud #booksofkids #storytimeforchildren  
MAN ON THE MOON (A DAY IN THE LIFE OF BOB) - SIMON BARTRAM - STORY TIME READ ALOUD FOR KEY STAGE 1

